

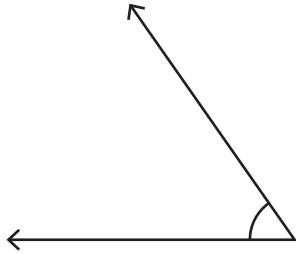
Name : _____

Score : _____

Measuring Angles

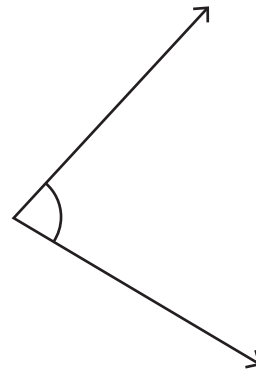
Measure each angle using protractor.

1)



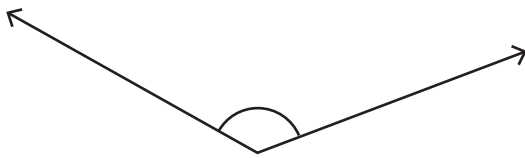
Angle : _____

2)



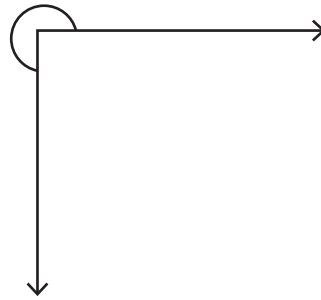
Angle : _____

3)



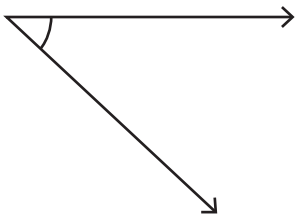
Angle : _____

4)



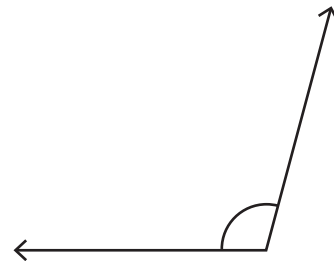
Angle : _____

5)



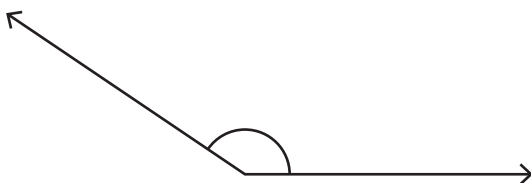
Angle : _____

6)



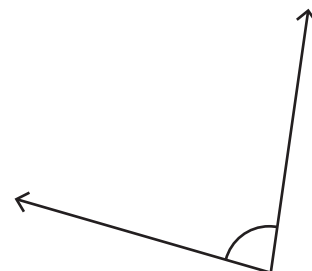
Angle : _____

7)



Angle : _____

8)



Angle : _____

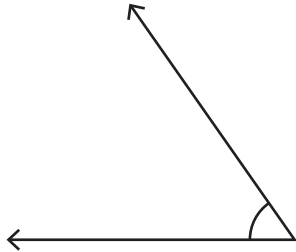
Name : _____

Score : _____

Answer Key

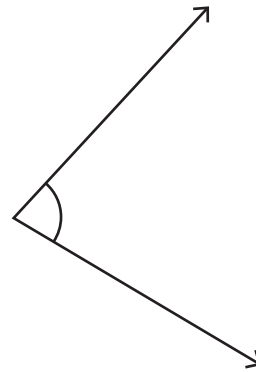
Measure each angle using protractor.

1)



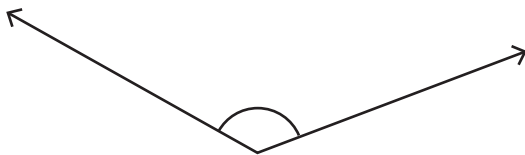
Angle : 55°

2)



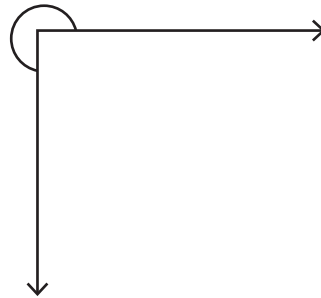
Angle : 78°

3)



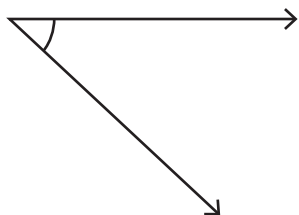
Angle : 130°

4)



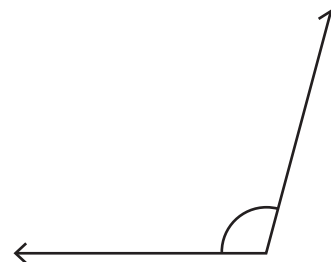
Angle : 270°

5)



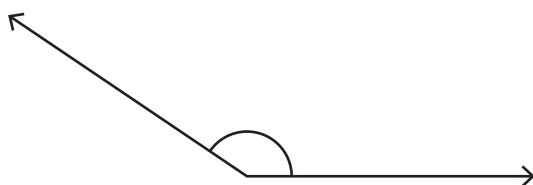
Angle : 43°

6)



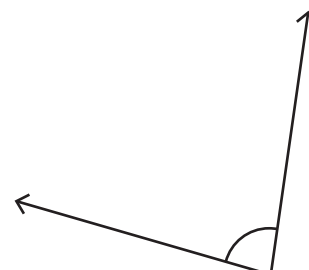
Angle : 105°

7)



Angle : 146°

8)



Angle : 82°