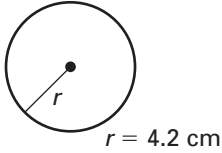


Practice B

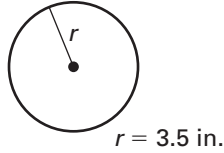
For use with pages 683–689

Find the indicated measure.

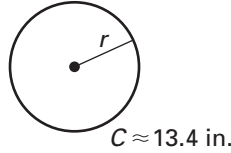
1. Circumference



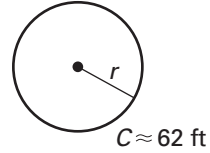
2. Circumference



3. Radius

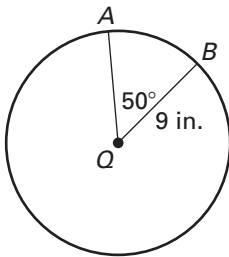


4. Radius

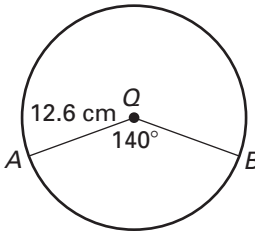


Find the length of \widehat{AB} .

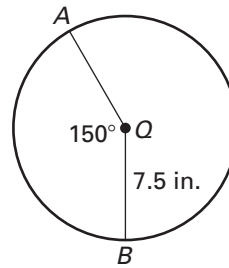
5.



6.

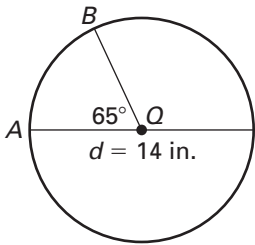


7.

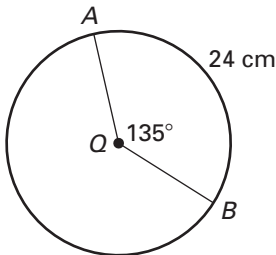


Find the indicated measure.

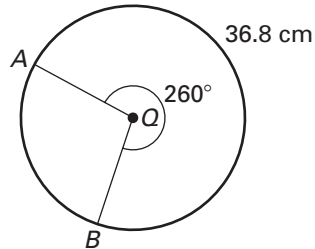
8. Length of \widehat{AB}



9. Circumference

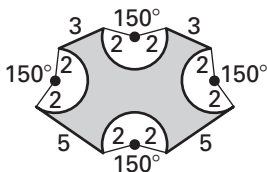


10. Radius

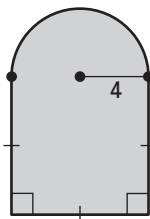


Each region is bounded by circular arcs or line segments. Find the perimeter of the region.

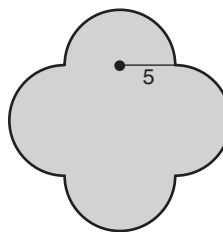
11.



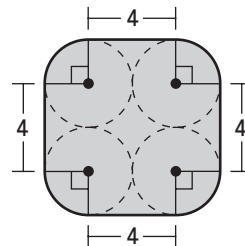
12.



13.



14.



15. **Bicycles** The chain of a bicycle travels along the front and rear sprockets. The circumference of each sprocket is given. About how long is the chain?

